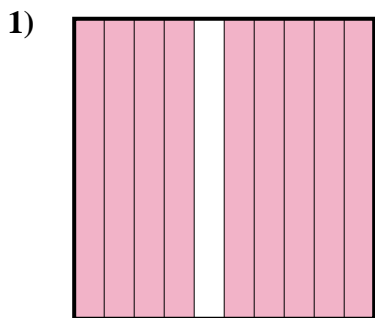


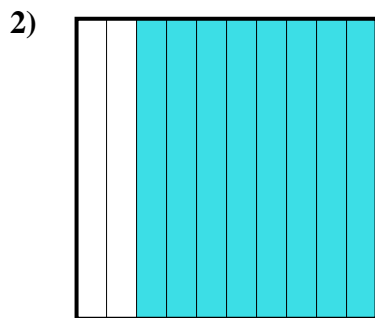


Determine which letter best represents the amount shaded of the whole.

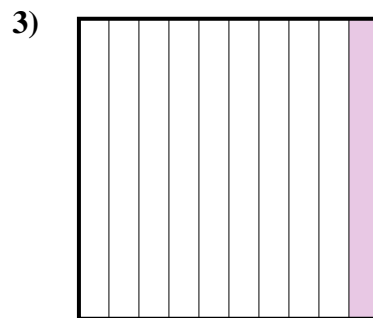
Answers



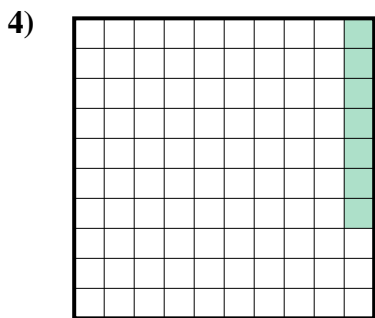
- A. 9
- B. 900.0
- C. 90
- D. 0.9



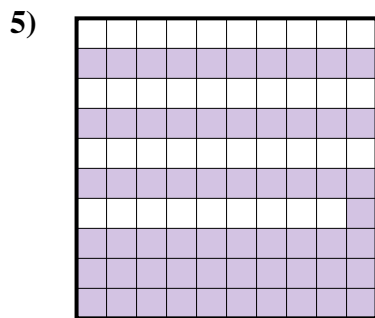
- A. 800.0
- B. 0.8
- C. 0.08
- D. 8



- A. 0.1
- B. 100.00
- C. 0.01
- D. 1



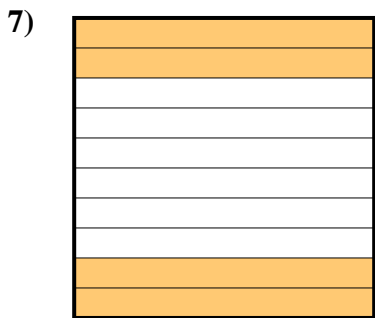
- A. 0.007
- B. 70.0
- C. 0.7
- D. 0.07



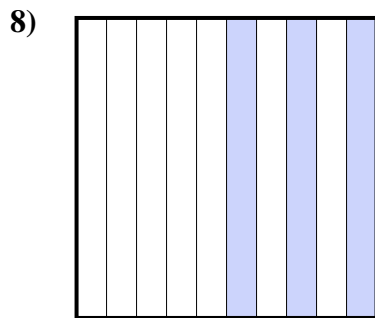
- A. 0.61
- B. 0.061
- C. 6.1
- D. 610.0



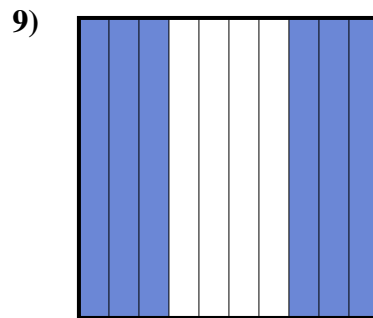
- A. 0.5
- B. 0.05
- C. 500.00
- D. 50



- A. 0.04
- B. 400.00
- C. 0.4
- D. 4



- A. 30
- B. 0.03
- C. 0.3
- D. 300.0



- A. 0.06
- B. 600.00
- C. 60
- D. 0.6

1. _____

2. _____

3. _____

4. _____

5. _____

6. _____

7. _____

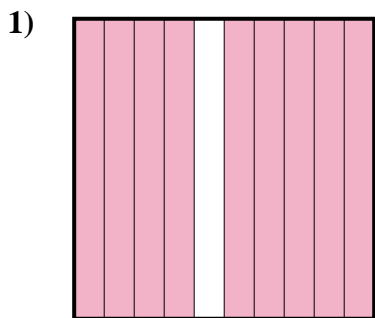
8. _____

9. _____

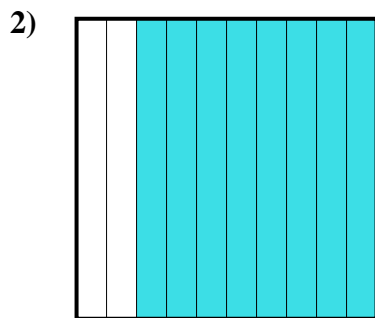


Determine which letter best represents the amount shaded of the whole.

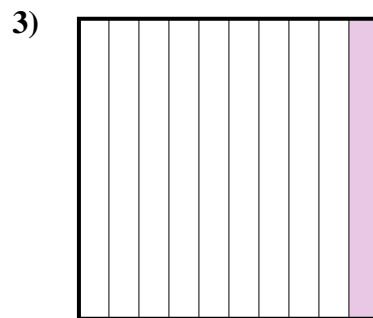
Answers



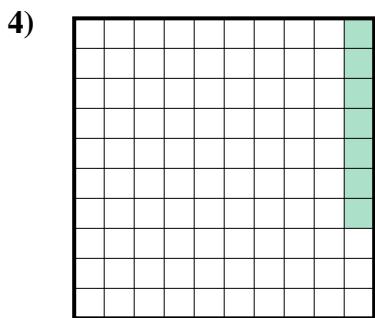
- A. 9
- B. 900.0
- C. 90
- D. 0.9



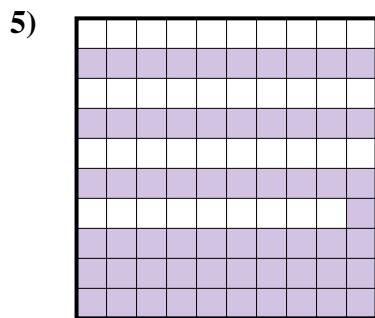
- A. 800.0
- B. 0.8
- C. 0.08
- D. 8



- A. 0.1
- B. 100.00
- C. 0.01
- D. 1



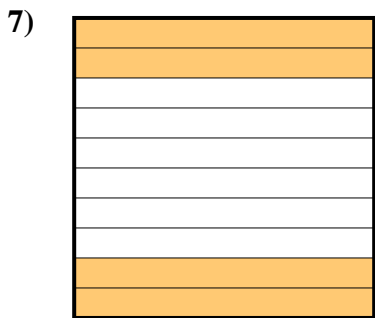
- A. 0.007
- B. 70.0
- C. 0.7
- D. 0.07



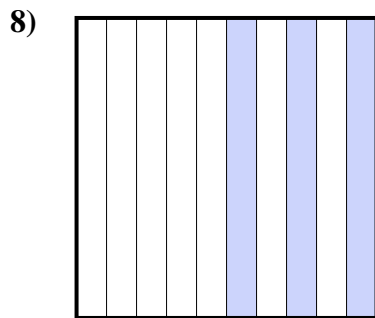
- A. 0.61
- B. 0.061
- C. 6.1
- D. 610.0



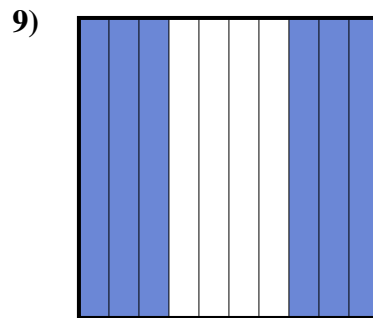
- A. 0.5
- B. 0.05
- C. 500.00
- D. 50



- A. 0.04
- B. 400.00
- C. 0.4
- D. 4



- A. 30
- B. 0.03
- C. 0.3
- D. 300.0



- A. 0.06
- B. 600.00
- C. 60
- D. 0.6

- 1. **D**
- 2. **B**
- 3. **A**
- 4. **D**
- 5. **A**
- 6. **A**
- 7. **C**
- 8. **C**
- 9. **D**